


Nombre: \_\_\_\_\_ Fecha: \_\_\_\_\_

# CONTINÚA LAS SERIES







Nombre: \_\_\_\_\_

Fecha: \_\_\_\_\_

# COMPLETA LAS PIRÁMIDES NUMÉRICAS





Nombre: \_\_\_\_\_

Fecha: \_\_\_\_\_

# RESUELVE

$$\text{Ice cream bar} + \text{Ice cream bar} = 100$$

$$\text{Ice cream bar} - \text{Ice cream cone} = 40$$

$$\text{Ice cream cone} + \text{Ice cream bucket} = 80$$

$$\text{Ice cream bar} = \square$$

$$\text{Ice cream cone} = \square$$

$$\text{Ice cream bucket} = \square$$