


# MCM y MCD: ¿Quién vive en cada casa encantada?

Nombre: \_\_\_\_\_


Fecha: \_\_\_\_\_



48

48 =  
72 =  
mcm =  
mcd =


72



¿Quiénes viven en esta casa?

PEGAR


PEGAR



60

60 =  
75 =  
mcm =  
mcd =

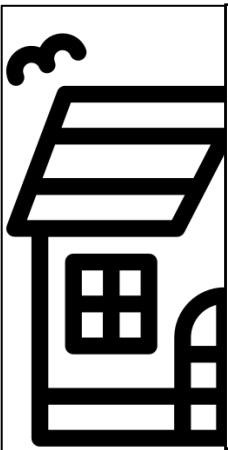
75



¿Quiénes viven en esta casa?

PEGAR

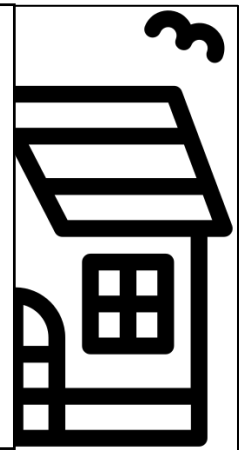
PEGAR



84

84 =  
315 =  
mcm =  
mcd =


315



¿Quiénes viven en esta casa?

PEGAR

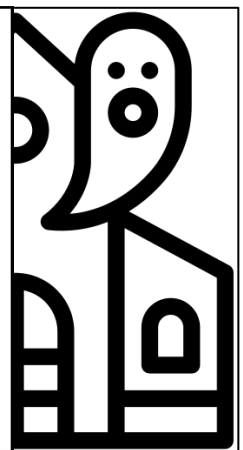
PEGAR



147

147 =  
175 =  
mcm =  
mcd =

175



¿Quiénes viven en esta casa?

PEGAR

PEGAR