



# Sumas y restas de verano

Nombre: \_\_\_\_\_

Fecha: \_\_\_\_\_

Resuelve y colorea cada helado según el resultado para saber su sabor:

De naranja:



Menor que 50

De limón:




Entre 50 y 100

De fresa:




Mayor que 100




$$\begin{array}{r} 75 \\ + 28 \\ \hline \end{array}$$




$$\begin{array}{r} 89 \\ - 53 \\ \hline \end{array}$$



$$\begin{array}{r} 156 \\ - 68 \\ \hline \end{array}$$




$$\begin{array}{r} 23 \\ + 17 \\ \hline \end{array}$$



$$\begin{array}{r} 64 \\ + 59 \\ \hline \end{array}$$




$$\begin{array}{r} 103 \\ - 47 \\ \hline \end{array}$$



$$\begin{array}{r} 171 \\ - 123 \\ \hline \end{array}$$



$$\begin{array}{r} 86 \\ + 24 \\ \hline \end{array}$$



# Sumas y restas de verano

Nombre: \_\_\_\_\_

Fecha: \_\_\_\_\_

Resuelve y colorea cada helado según el resultado para saber su sabor:

De naranja:



Menor que 50

De limón:

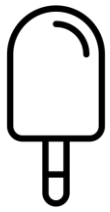


Entre 50 y 100

De fresa:



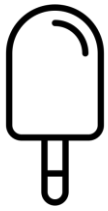
Mayor que 100



$$\begin{array}{r} 45 \\ + 39 \\ \hline \end{array}$$



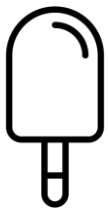
$$\begin{array}{r} 183 \\ - 66 \\ \hline \end{array}$$



$$\begin{array}{r} 97 \\ - 74 \\ \hline \end{array}$$



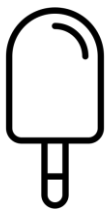
$$\begin{array}{r} 48 \\ + 51 \\ \hline \end{array}$$



$$\begin{array}{r} 72 \\ + 76 \\ \hline \end{array}$$



$$\begin{array}{r} 108 \\ - 89 \\ \hline \end{array}$$



$$\begin{array}{r} 234 \\ - 145 \\ \hline \end{array}$$



$$\begin{array}{r} 68 \\ + 47 \\ \hline \end{array}$$