

Representación de una multiplicación

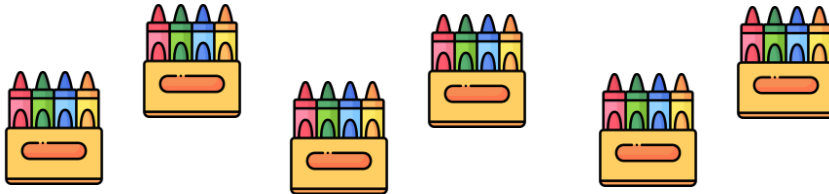
Nombre: _____

Fecha: _____

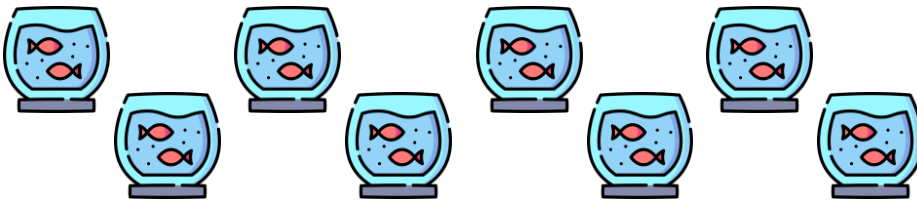


Velas: 3
Candelabros: 5

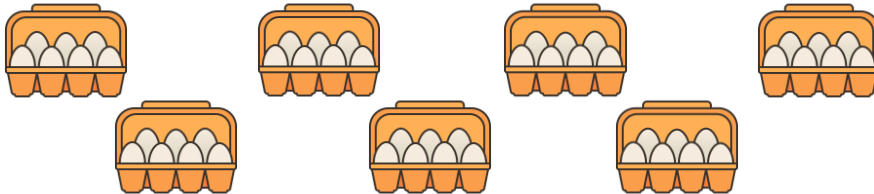
$$3 \times 5 = 15$$



$$\square \times \square = \square$$



$$\square \times \square = \square$$



$$\square \times \square = \square$$



$$\square \times \square = \square$$



$$\square \times \square = \square$$