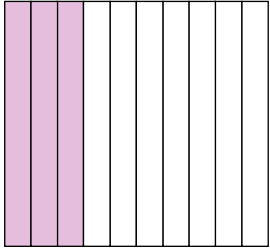


Fracciones decimales

Nombre: _____

Fecha: _____


Escribe en forma de fracción y en forma decimal:



Fracción

 $\frac{\quad}{\quad}$

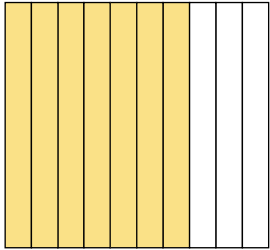
Decimal



Fracción

 $\frac{\quad}{\quad}$

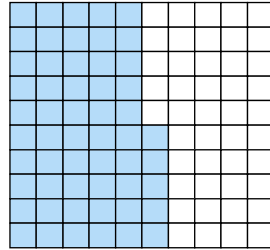
Decimal



Fracción

 $\frac{\quad}{\quad}$

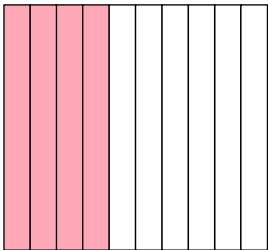
Decimal



Fracción

 $\frac{\quad}{\quad}$

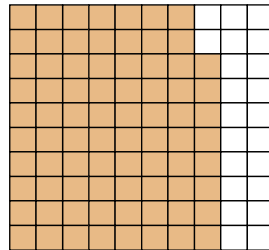
Decimal



Fracción

 $\frac{\quad}{\quad}$


Decimal



Fracción

 $\frac{\quad}{\quad}$

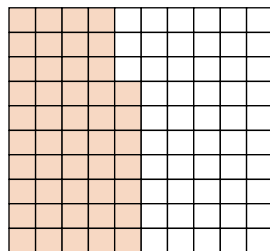
Decimal



Fracción

 $\frac{\quad}{\quad}$


Decimal



Fracción

 $\frac{\quad}{\quad}$

Decimal

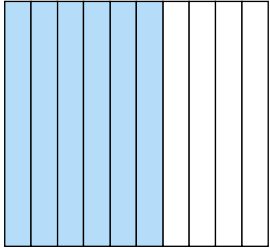


Fracciones decimales

Nombre: _____


Fecha: _____

Escribe en forma de fracción y en forma decimal:



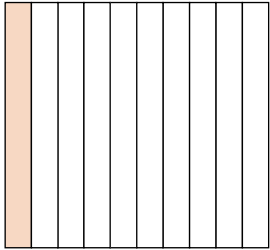
Fracción

Decimal



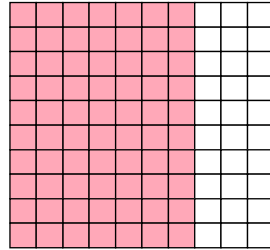
Fracción

Decimal



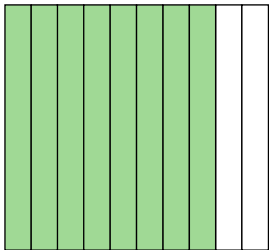
Fracción

Decimal



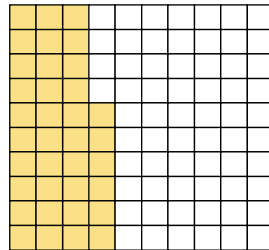
Fracción

Decimal



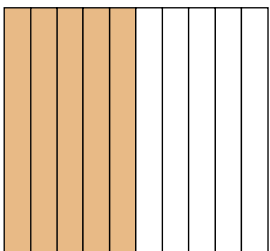
Fracción

Decimal




Fracción

Decimal



Fracción

Decimal



Fracción

Decimal