

EVALUACIÓN INICIAL




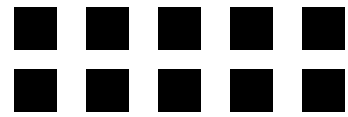


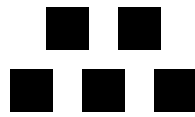



MATEMÁTICAS • 1.º Primaria

Nombre y apellidos:

Curso:

Fecha:

● CUENTA Y ESCRIBE.



● COLOREA.

2	5	7

● COMPLETA.

1			4		6	7			10
---	--	--	---	--	---	---	--	--	----

● SUMA.

$5 + 4 = \square$

$2 + 4 = \square$

$11 + 23 = \square$

$26 + 2 = \square$

● RESTA.

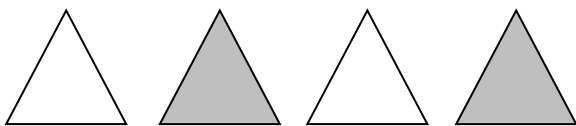
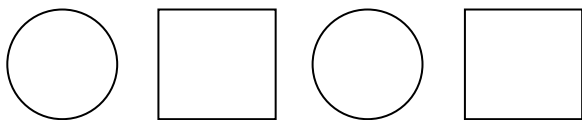
$8 - 2 = \square$

$3 - 1 = \square$

$15 - 2 = \square$

$17 - 5 = \square$

● COMPLETA LAS SERIES.



● COLOREA ASÍ

CERCA → ROJO

LEJOS → AZUL

