




# REPRESENTAR GRÁFICAMENTE FRACCIONES

Nombre y apellidos: .....

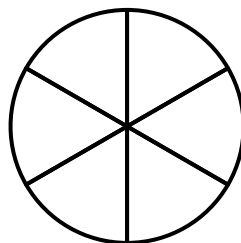
Curso: .....

Fecha: .....


Colorea las partes necesarias para representar cada fracción:




$$\frac{2}{4}$$



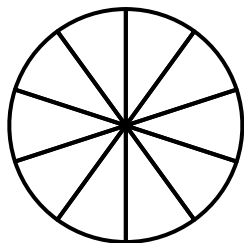
$$\frac{5}{6}$$



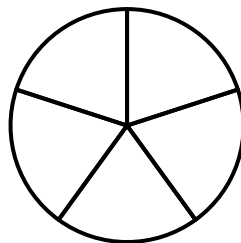
$$\frac{1}{3}$$



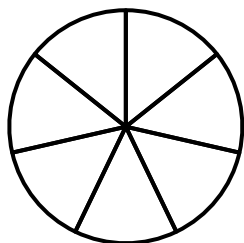
$$\frac{4}{8}$$



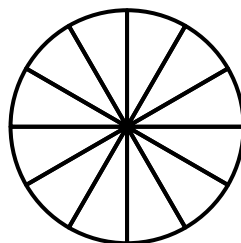
$$\frac{6}{10}$$



$$\frac{3}{5}$$



$$\frac{7}{7}$$



$$\frac{10}{12}$$