

JUEGO DE SUMAS



Nombre y apellidos:

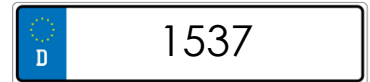
Curso:

Fecha:

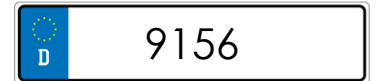

Averigua de quien es cada coche
a partir de la matrícula



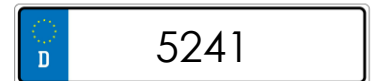
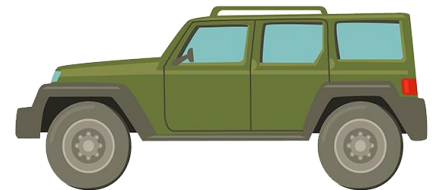
$$\begin{array}{r} 3.452 \\ + 1.789 \\ \hline \end{array}$$



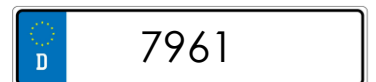
$$\begin{array}{r} 963 \\ + 574 \\ \hline \end{array}$$



$$\begin{array}{r} 4.805 \\ + 3.156 \\ \hline \end{array}$$



$$\begin{array}{r} 2.639 \\ + 6.517 \\ \hline \end{array}$$



JUEGO DE SUMAS



Nombre y apellidos:

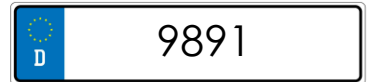
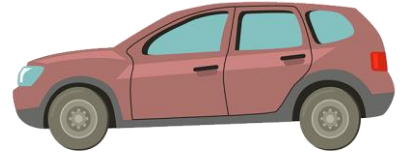
Curso:

Fecha:

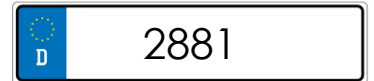

Averigua de quien es cada coche
a partir de la matrícula



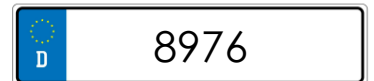
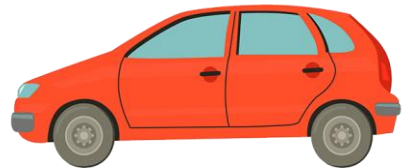
$$\begin{array}{r} 4.861 \\ + 2.123 \\ \hline \end{array}$$



$$\begin{array}{r} 5.726 \\ + 3.250 \\ \hline \end{array}$$



$$\begin{array}{r} 2.673 \\ + 7.218 \\ \hline \end{array}$$



$$\begin{array}{r} 1.564 \\ + 1.317 \\ \hline \end{array}$$

