













Nombre y apellidos: .....

● Completa las series.

	$\ominus$		$=$		$=$		$\ominus$		$\perp$	
<input type="text"/>	$\perp$	<input type="text"/>	$\ominus$	<input type="text"/>	$\perp$	<input type="text"/>	$\perp$	<input type="text"/>	$\perp$	<input type="text"/>
	$\circ$	<input type="text"/>	$\perp$	<input type="text"/>	$\ominus$	<input type="text"/>	$\circ$	<input type="text"/>	$\perp$	
<input type="text"/>	$\perp$	<input type="text"/>	$\perp$	<input type="text"/>	$\perp$	<input type="text"/>	$\perp$	<input type="text"/>	$\perp$	<input type="text"/>
	$\perp$	<input type="text"/>	$\ominus$	<input type="text"/>	$=$	<input type="text"/>	$\perp$	<input type="text"/>	$\circ$	
<input type="text"/>	$\perp$	<input type="text"/>	$\perp$	<input type="text"/>	$\perp$	<input type="text"/>	$\perp$	<input type="text"/>	$\perp$	<input type="text"/>
	$\circ$	<input type="text"/>	$\perp$	<input type="text"/>	$\perp$	<input type="text"/>	$\circ$	<input type="text"/>	$\perp$	
<input type="text"/>	$\perp$	<input type="text"/>	$\perp$	<input type="text"/>	$\perp$	<input type="text"/>	$\perp$	<input type="text"/>	$\perp$	<input type="text"/>