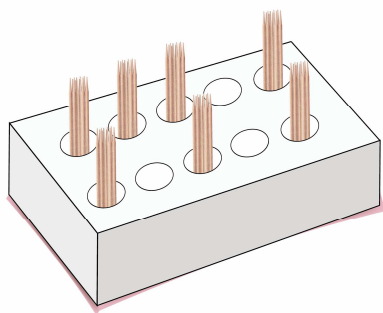
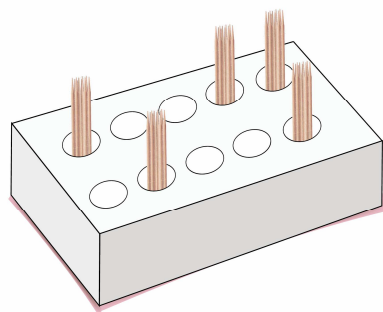


Nombre y apellidos:

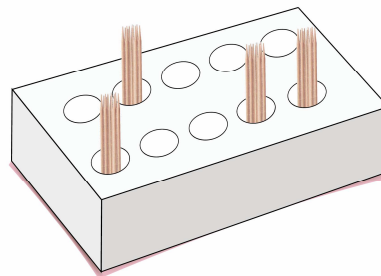
● Escribe como una suma cuántos palillos hay en el «armador de centenas» y cuántos faltan para formar 100.



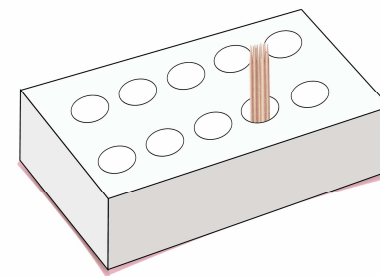
$$70 + 30 = 100$$



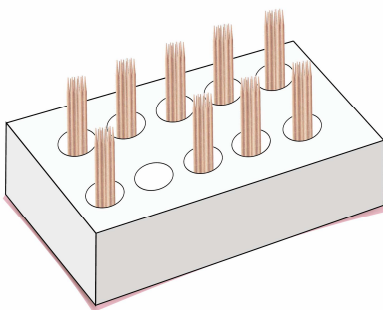
$$\square + \square = \square$$



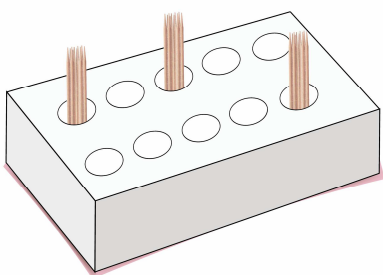
$$\square + \square = \square$$



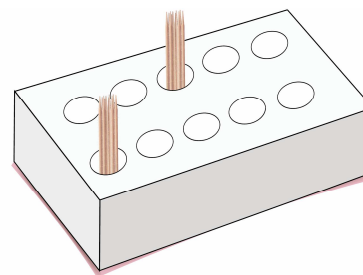
$$\square + \square = \square$$



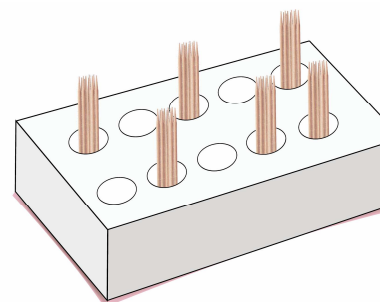
$$\square + \square = \square$$



$$\square + \square = \square$$



$$\square + \square = \square$$



$$\square + \square = \square$$