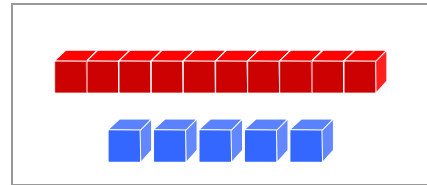


# FICHA 9

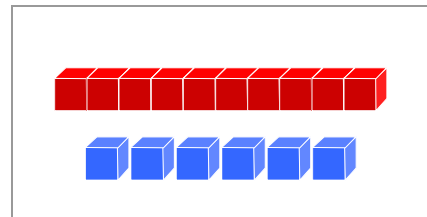
Nombre y apellidos: .....

◆ Suma y une.

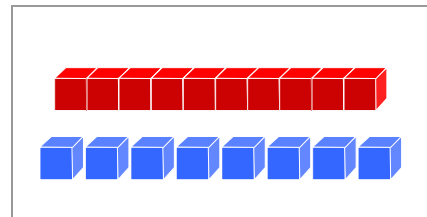
$$\boxed{13} + \boxed{5} = \boxed{\phantom{00}}$$



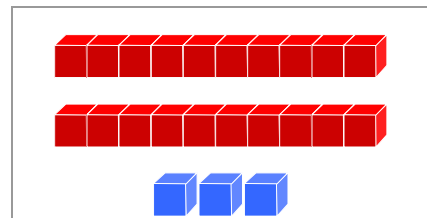
$$\boxed{8} + \boxed{7} = \boxed{\phantom{00}}$$



$$\boxed{11} + \boxed{5} = \boxed{\phantom{00}}$$



$$\boxed{19} + \boxed{4} = \boxed{\phantom{00}}$$



◆ Observa y responde.



¿Qué mano tiene levantada?

.....  
.....